

Total Questions : 35

Time : 1 hr.

**Guidelines for the Candidate**

1. You will get additional ten minutes to fill up information about yourself on the OMR Sheet, before the start of the exam.
2. Write your **Name, School Code, Class, Section, Roll No.** and **Mobile Number** clearly on the **OMR Sheet** and do not forget to sign it. We will share your marks / result and other information related to SOF exams on your mobile number.
3. The Question Paper comprises four sections:  
**General Awareness** (20 Questions), **Current Affairs** (5 Questions), **Life Skills** (5 Questions) and **Achievers Section** (5 Questions).  
Each question in Achievers Section carries 2 marks, whereas all other questions carry 1 mark each.
4. All questions are compulsory. There is no negative marking. Use of calculator is not permitted.
5. There is only ONE correct answer. Choose only ONE option for an answer.
6. To mark your choice of answers by darkening the circles on the OMR Sheet, use **HB Pencil** or **Blue / Black ball point pen** only.  
E.g.

**Q.10 : What would you keep in an aquarium?**

- A. Cats                      B. Dogs                      C. Fish                      D. Cows

As the correct answer is option C, you must darken the circle corresponding to option C on the OMR Sheet.

10. (A) (B) ● (D)

7. Rough work should be done in the blank space provided in this booklet.
8. Return the OMR Sheet to the invigilator at the end of the exam.
9. Please fill in your personal details in the space provided before attempting the paper.



**DO NOT OPEN THIS BOOKLET UNTIL ASKED TO DO SO**

Name:.....

SOF Olympiad Roll No.:..... Contact No.:.....

## GENERAL AWARENESS

- 1** Which instrument is used to examine the ear canal and eardrum?  
A. Stethoscope  
B. Otoscope  
C. Syringe  
D. Reflex hammer
- 
- 2** Which among the following is the compilation of first five books of the Hebrew Bible?  
A. Zohar  
B. Torah  
C. The Analects  
D. Tripitaka
- 
- 3** Which of the following is NOT a part of the human excretory system?  
A. Kidney  
B. Ureter  
C. Urinary bladder  
D. Pancreas
- 
- 4** Which is the smallest constellation in the night sky?  
A. Ursa minor  
B. Cassiopeia  
C. Hydra  
D. Crux
- 
- 5** Which monument in the United Kingdom is believed to have served as an ancient solar calendar?

A.



Big Ben

B.



Stonehenge

C.



Tower of London

D.



London Bridge

- 
- 6** The microbes that cause diseases like typhoid and pneumonia belong to which group?  
A. Fungi  
B. Bacteria  
C. Virus  
D. Protozoa
- 
- 7** Which among the following is the healthiest method of cooking vegetables?  
A. Deep frying  
B. Steaming  
C. Grilling with lots of oil  
D. Boiling

**8 Which of the following animals undergoes hibernation?**

- A. Lion
  - B. Leopard
  - C. Hedgehog
  - D. Rabbit
- 

**9 Which of the following cities is popularly called 'The Big Apple'?**

- A. New York City
  - B. Venice
  - C. Vienna
  - D. Rome
- 

**10 Which of the following has aerial roots?**

- A. Teak tree
  - B. Banyan tree
  - C. Fir tree
  - D. Lemon tree
- 

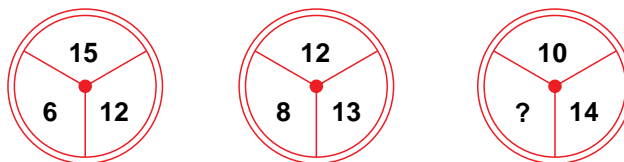
**11 The acronym CCTV stands for \_\_\_\_\_.**

- A. Closed Circuit Television
  - B. Cable Communication Television
  - C. Camera Controlled Television
  - D. Camera Cum Television
- 

**12 A desert climate is characterised by**

- A. High humidity and low temperature
  - B. Low precipitation and extreme temperature
  - C. Heavy snowfall and high temperature
  - D. Mild summers.
- 

**13 Find the missing number, if a certain rule is followed in all the three figures.**







- A. 8
  - B. 9
  - C. 12
  - D. 13
- 

**14 Select the sentence that uses the homophones correctly.**

- A. You are not aloud to talk allowed in the library.
  - B. My house maid made curry for the dinner.
  - C. I turned pail when I dropped the water pale.
  - D. All of these
- 

**15 Which among the following is the largest impact structure formed by meteorite on Earth?**

- A. Vredefort
- B. South Pole-Aitken Basin
- C. Utopia
- D. None of these

- 16 Sattriya dance originated in which state of India?**  
A. Karnataka B. Assam  
C. Odisha D. Kerala
- 
- 17 Baseball was added as an official olympic sport for the first time in which year?**  
A. 1885 B. 1992  
C. 1936 D. None of these
- 
- 18 The motto of Olympic Games in Latin is Citius, Altius, Fortius - Communiter. In English, it translates to**  
A. Fearless, Flawless, Faster - Community  
B. Run, Jump, Swim - Communicate  
C. Faster, Higher, Stronger - Together  
D. Come, Compete, Celebrate - With each other.
- 
- 19 Which of the following is used to disinfect water?**  
A. Benzene B. Chlorine  
C. Nitrogen D. Carbon monoxide
- 
- 20 Which of the following is NOT a social media platform?**  
A.  B.  C.  D. 

## CURRENT AFFAIRS

- 21 Which city was the host of Kho-Kho World Cup 2025?**  
A. Chennai B. Kolkata  
C. Hyderabad D. New Delhi
- 
- 22 Who has become the first Indian astronaut to travel to the International Space Station on private mission?**  
A.   
Captain Angad Pratap  
B.   
Captain Shubhanshu Shukla  
C.   
Captain Ajit Krishnan  
D.   
Captain Prasanth B. Nair

**23 Who is the current Chief Election Commissioner of India?**

A.



Shri Sukhbir  
S. Sandhu

B.



Shri Vivek  
Joshi

C.



Shri Gyanesh  
Kumar

D. None of these

**24 Who among the following Indian cricketers was honoured with the BCCI Special Award at the BCCI Awards 2025?**

A. Mohammad Kaif

B. Virender Sehwag

C. Ravichandran Ashwin

D. Yuvraj Singh

**25 Garud Shakti is a joint military exercise between India and \_\_\_\_\_.**

A. China

B. Nepal

C. Indonesia

D. United States of America

## LIFE SKILLS

**26 During a formal meal, what is the correct way to sip soup using spoon?**

A. Scoop the soup towards you and slurp

B. Tilt the bowl and then scoop the soup

C. Scoop the spoon away from you and sip quietly from the sides of the spoon

D. Take a big spoon, hold the bowl closer to your mouth and quickly drink the soup

**27 Why is it important to ask questions while learning new things in a classroom?**

A. For deeper understanding of the subject

B. For making learning boring

C. To annoy the teacher

D. To make a good impression on your classmates

**28 Why is it risky to download free apps or games from unofficial websites without adult supervision?**

A. They might contain viruses or malware.

B. Free games are boring.

C. Free apps can increase the speed at which computer works.

D. None of these

**29** Why is it important to have a positive attitude in a competition?

- A. So that you can feel sad on loosing the competition
- B. So that you can enjoy the experience and learn from it
- C. So that others get distracted from the competition
- D. None of these

**30** Which of the following signs shows “the U-Turn is prohibited”?



### ACHIEVERS SECTION

**31** Select the correct statements.

- I. Bone marrow is the fastest growing tissue in human body.
- II. The sartorius muscle is the longest muscle in the human body.
- III. The hyoid bone is the only bone in our body that is not articulated with any other bone.
- IV. There are 27 bones in human skull.

- A. I, II and III only
- B. III only
- C. IV only
- D. I, II, III and IV

**32** Match the columns and select the correct option.

**Column I**  
**(Author)**

**Column II**  
**(Book)**

P. Robert Louis Stevenson

(1) The Secret Garden

Q. Anna Sewell

(2) Treasure Island

R. Frances Hodgson Burnett

(3) Black Beauty

S. Philip Pullman

(4) Northern Lights

A. P-(2), Q-(3), R-(1), S-(4)

B. P-(4), Q-(2), R-(3), S-(1)

C. P-(3), Q-(4), R-(1), S-(2)

D. P-(2), Q-(4), R-(1), S-(3)

**33** Select the option that correctly fills in the blanks.

P. The service line in each half of a tennis court is (I) metres away from the net.

Q. The radius of centre circle in a football field is (II) metres.

R. The length of a standard badminton court is    (III)    metres for both singles and doubles competitions.

S. The width of a standard hockey field is    (IV)    metres.

	(I)	(II)	(III)	(IV)
A.	2.6	7.2	10.6	64
B.	6.40	9.15	13.40	55
C.	6.3	5.7	14.2	70
D.	5.7	8.2	13.4	90

**34** Fill in the blanks and select the correct option.

(i) The sum of 2 times  $\frac{16}{21}$  and 5 times  $\frac{31}{21}$  is    (P)   .

(ii) The difference of fractions of vowels in words EQUATION and COMPUTER is    (Q)   .

	(P)	(Q)
A.	$8\frac{19}{21}$	$\frac{3}{8}$
B.	$7\frac{19}{21}$	$\frac{2}{8}$
C.	$7\frac{19}{21}$	$\frac{3}{8}$
D.	$8\frac{19}{21}$	$\frac{2}{8}$

**35** Which of the following statements is/are INCORRECT about the given image?



(1) It is a touchscreen technology.


(2) It allows users to directly interact with the display screen without the help of mouse or keyboard.


(3) It is an electrical calculator machine.

A. (1) only                      B. (3) only                      C. (1) and (2) only                      D. (2) and (3) only

SPACE FOR ROUGH WORK

SPACE FOR ROUGH WORK



For latest updates & information, please like  our Facebook page ([www.facebook.com/sofworld](http://www.facebook.com/sofworld)) or register on [www.sofworld.org/subscribe-updates.html](http://www.sofworld.org/subscribe-updates.html)

For Level 1 and Level 2 preparation material / free sample papers, please log on to **[www.mtg.in](http://www.mtg.in)**



**Head Office:** Plot 99, Sector 44 Institutional area, Gurugram -122 003 (HR), India  
Email: [info@sofworld.org](mailto:info@sofworld.org) | Website: [www.sofworld.org](http://www.sofworld.org)